

Name : _____

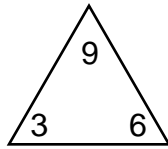
Score : _____

Teacher : _____

Date : _____

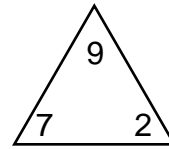
Complete Each Family of Facts

1)



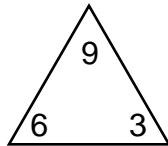
$$\begin{array}{rcl} \square & + & \square = \square \\ \square & + & \square = \square \\ \square & - & \square = \square \\ \square & - & \square = \square \end{array}$$

4)



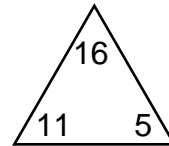
$$\begin{array}{rcl} \square & + & \square = \square \\ \square & + & \square = \square \\ \square & - & \square = \square \\ \square & - & \square = \square \end{array}$$

2)



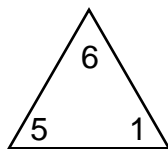
$$\begin{array}{rcl} \square & + & \square = \square \\ \square & + & \square = \square \\ \square & - & \square = \square \\ \square & - & \square = \square \end{array}$$

5)



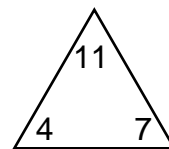
$$\begin{array}{rcl} \square & + & \square = \square \\ \square & + & \square = \square \\ \square & - & \square = \square \\ \square & - & \square = \square \end{array}$$

3)



$$\begin{array}{rcl} \square & + & \square = \square \\ \square & + & \square = \square \\ \square & - & \square = \square \\ \square & - & \square = \square \end{array}$$

6)



$$\begin{array}{rcl} \square & + & \square = \square \\ \square & + & \square = \square \\ \square & - & \square = \square \\ \square & - & \square = \square \end{array}$$



Name : _____

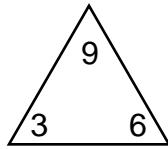
Score : _____

Teacher : _____

Date : _____

Complete Each Family of Facts

1)



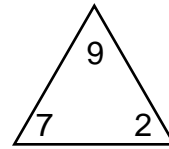
$$\boxed{3} + \boxed{6} = \boxed{9}$$

$$\boxed{6} + \boxed{3} = \boxed{9}$$

$$\boxed{9} - \boxed{6} = \boxed{3}$$

$$\boxed{9} - \boxed{3} = \boxed{6}$$

4)



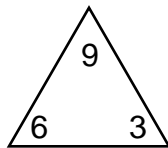
$$\boxed{7} + \boxed{2} = \boxed{9}$$

$$\boxed{2} + \boxed{7} = \boxed{9}$$

$$\boxed{9} - \boxed{2} = \boxed{7}$$

$$\boxed{9} - \boxed{7} = \boxed{2}$$

2)



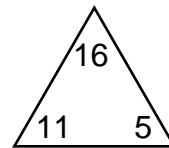
$$\boxed{6} + \boxed{3} = \boxed{9}$$

$$\boxed{3} + \boxed{6} = \boxed{9}$$

$$\boxed{9} - \boxed{3} = \boxed{6}$$

$$\boxed{9} - \boxed{6} = \boxed{3}$$

5)



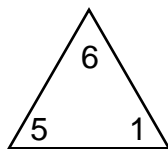
$$\boxed{11} + \boxed{5} = \boxed{16}$$

$$\boxed{5} + \boxed{11} = \boxed{16}$$

$$\boxed{16} - \boxed{5} = \boxed{11}$$

$$\boxed{16} - \boxed{11} = \boxed{5}$$

3)



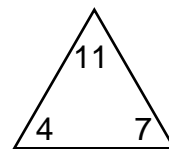
$$\boxed{5} + \boxed{1} = \boxed{6}$$

$$\boxed{1} + \boxed{5} = \boxed{6}$$

$$\boxed{6} - \boxed{1} = \boxed{5}$$

$$\boxed{6} - \boxed{5} = \boxed{1}$$

6)



$$\boxed{4} + \boxed{7} = \boxed{11}$$

$$\boxed{7} + \boxed{4} = \boxed{11}$$

$$\boxed{11} - \boxed{7} = \boxed{4}$$

$$\boxed{11} - \boxed{4} = \boxed{7}$$

